

# Year 4 Homework – 10.05.24

## Homework

### Maths

In maths this week, we have started our money unit. We have been converting from pounds to pence and have been looking at rounding to the nearest pound. Please see the worksheets attached to complete. Mild (Q1-5), Hot (Q1-6) and Flamin' (Q1-8).

### Year 4 Multiplication Check

In June 2024, all children in Year 4 will have a multiplication check which will take place in school to test their knowledge of times tables up to 12x12. The pupils will have 25 questions but only six seconds to answer each question, therefore it is very important the children learn each times table thoroughly.

In order to prepare for this, children are learning a times table each week for homework but they also need to recap on old times tables too. Please encourage your child to practise using the link below which is an example of how the test will actually look.

<https://mathsframe.co.uk/en/resources/resource/477/Multiplication-Tables-Check>

For more information, click on the link below:

[https://assets.publishing.service.gov.uk/government/uploads/system/uploads/attachment\\_data/file/869846/2020\\_Information\\_for\\_parents\\_multiplication\\_tables\\_check.pdf](https://assets.publishing.service.gov.uk/government/uploads/system/uploads/attachment_data/file/869846/2020_Information_for_parents_multiplication_tables_check.pdf)

### Spellings

This week my score was \_\_\_\_\_/10

Please learn the spellings provided in your reading diary.

### Reading

Reading diaries are currently on their way and are due to be delivered to school at the end of the month so we will pass these onto the children when we receive them. In the meantime, please keep reading as normal. Thank you!

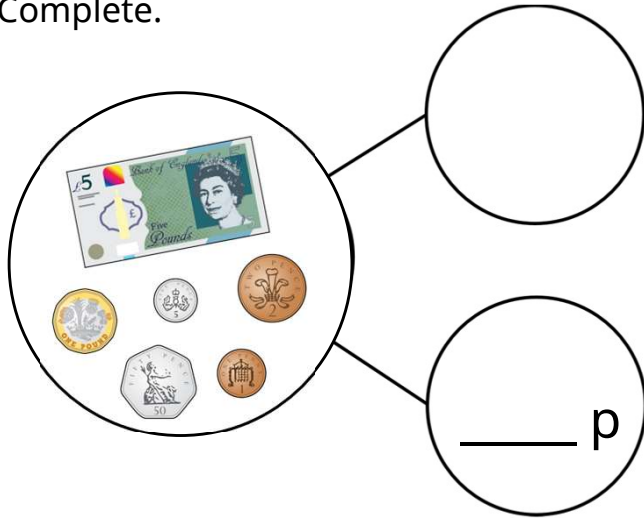
Homework is due to be handed in on a **Wednesday**.

# Money

A

Name \_\_\_\_\_

1 Complete.



£6 + \_\_\_\_\_ p = £ \_\_\_\_\_

2 Circle the notes and coins which total £8.74



2 marks



1 mark

3 Whitney has this money in her purse.



Circle the item she can buy.



£8.99



£9.49





£9.99



1 mark

4 Draw an arrow to show where each coin will go to give each box the same total.



1 mark

5 Use  $<$ ,  $>$  or  $=$  to complete the comparisons.

£3.46  £3.40

£12.28  12 pounds and 82p

Nine pounds  
and 70 pence



3 marks

6 Here is a receipt.

Pasta.....	£1.05
Tomatoes.....	75p
Bread.....	£2.25
Ice-cream.....	£2.99

Circle the best **estimate** for the total cost.

£5    £6    £7    £8

2 marks

7 Dora has £12.35

Alex has twelve pounds and five pence.

Tommy has



Order the children from least to most money.

\_\_\_\_\_

2 marks

How much more money does Alex have than Tommy?

\_\_\_\_\_

1 mark

8 Rosie empties her money box.

She has 6 fifty pence pieces.  
She has 3 twenty pence pieces.  
She has 2 pound coins.

How much does Rosie have altogether?

£ \_\_\_\_\_

2 marks