


# Multiplication sentences


1 Complete the sentences to match the pictures.



lots of 3 =

multiplied by 3 =


× 3 =



lots of 6 =

multiplied by 6 =

× 6 =



lots of  =

multiplied by  =

×  =

d)



lots of  =

multiplied by  =

×  =


2 Draw a picture for each sentence.

a) 4 lots of 5

b) 2 multiplied by 4

3 Complete the sentences for each picture.

a)



$$\square \text{ lots of } \square = \square$$

$$\square \times \square = \square$$



$$\square \text{ lots of } \square = \square$$

$$\square \times \square = \square$$

What is the same about the number sentences?  
What is different?

4 a) The answer is 12  
What could the multiplication be?

\_\_\_\_\_

Compare answers with a partner.

b) Now the answer is 15  
What could the multiplication be?

\_\_\_\_\_

Can you write more or fewer multiplications for 15?